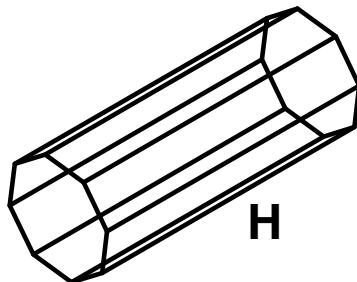
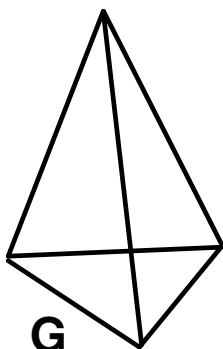
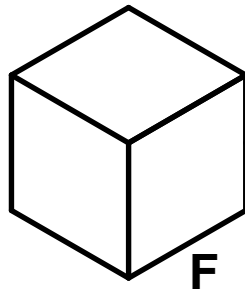
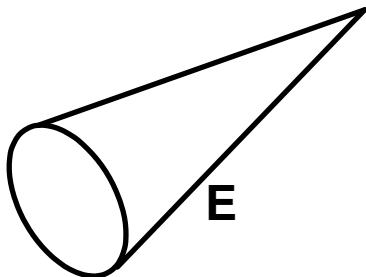
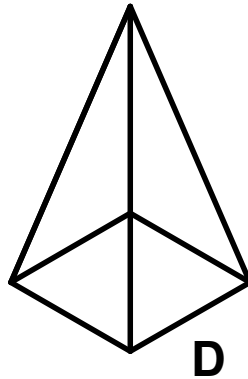
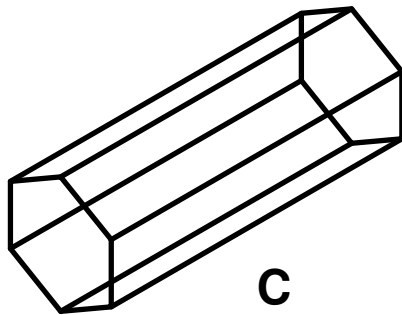
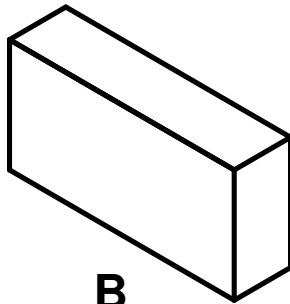
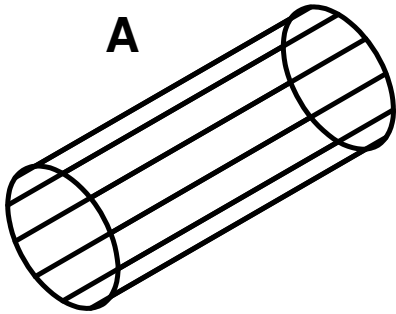


Can you identify each of these 3-D shapes? Join the shape to the name.



Cube

Cuboid

**Square based
Pyramid**

Cone

Cylinder

Tetrahedron

Octagonal Prism

Hexagonal Prism

4501-01 Revise identifying 3-D shapes (pg 1) Answers

Free resources from Mathsblog in association with www.mathsgogogo.co.uk © Mathsgogogo

- A)** Cylinder
- B)** Cuboid
- C)** Hexagonal Prism
- D)** Square based pyramid
- E)** Cone
- F)** Cube
- F)** Tetrahedron
- G)** Octagonal Prism