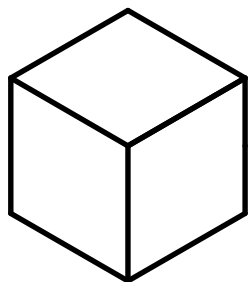
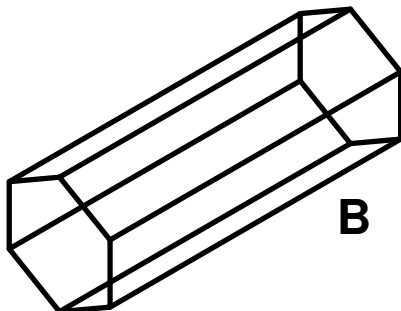


Can you identify each of these 3-D shapes? Write the name under the shape.



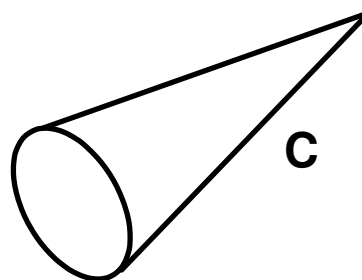
**A**

\_\_\_\_\_



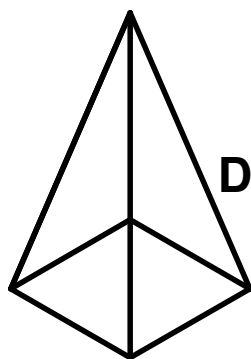
**B**

\_\_\_\_\_



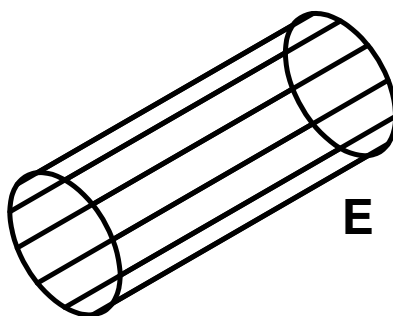
**C**

\_\_\_\_\_



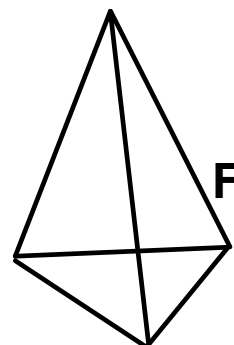
**D**

\_\_\_\_\_



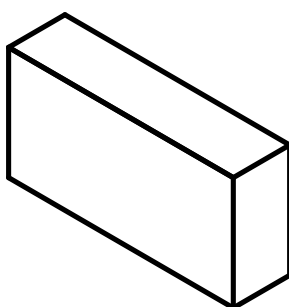
**E**

\_\_\_\_\_



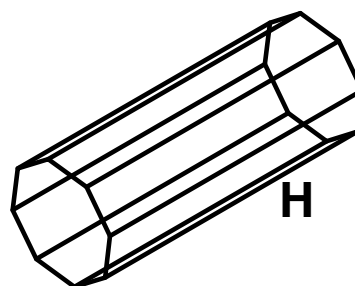
**F**

\_\_\_\_\_



**G**

\_\_\_\_\_



**H**

\_\_\_\_\_

No cheating,  
now!



**4501-02 Revise identifying 3-D shapes (pg 2)      Answers**

Free resources from Mathsblog in association with [www.mathsgogogo.co.uk](http://www.mathsgogogo.co.uk) © Mathsgogogo

- A)** Cube
- B)** Hexagonal Prism
- C)** Cone
- D)** Square Based Pyramid
- E)** Cylinder
- F)** Tetrahedron
- G)** Cuboid
- H)** Octagonal Prism