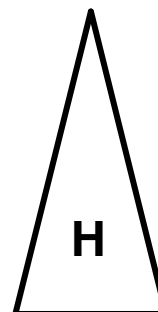

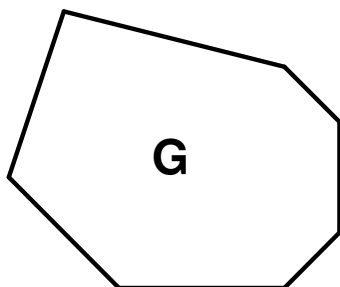
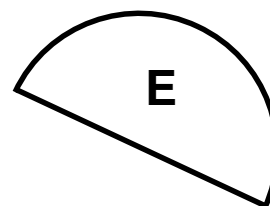
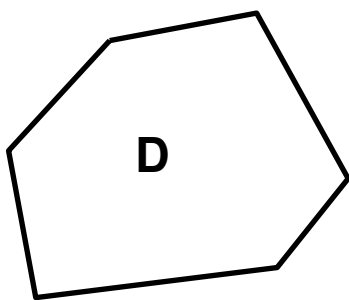
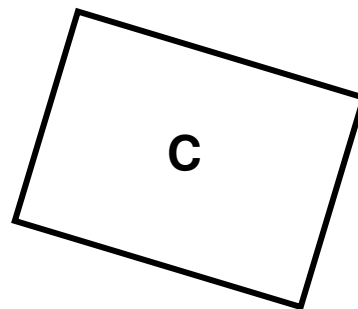
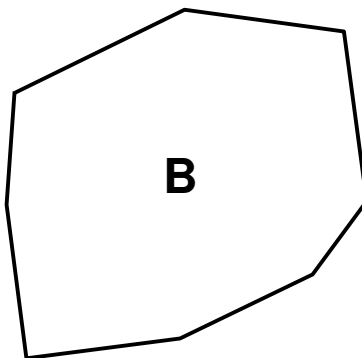
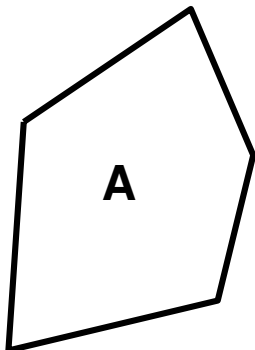


Can you identify each of these 2-D shapes? Write the name under the shape



**4501-04 Revise identifying 2-D shapes (pg 2)      Answers**

Free resources from Mathsblog in association with [www.mathsgogogo.co.uk](http://www.mathsgogogo.co.uk)    © Mathsgogogo

- A)** Pentagon
- B)** Octagon
- C)** Rectangle
- D)** Hexagon
- E)** Semicircle
- F)** Equilateral Triangle
- G)** Heptagon
- H)** Isosceles Triangle