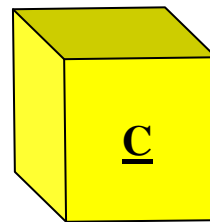
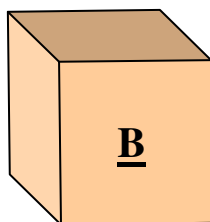
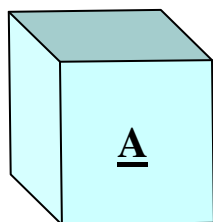
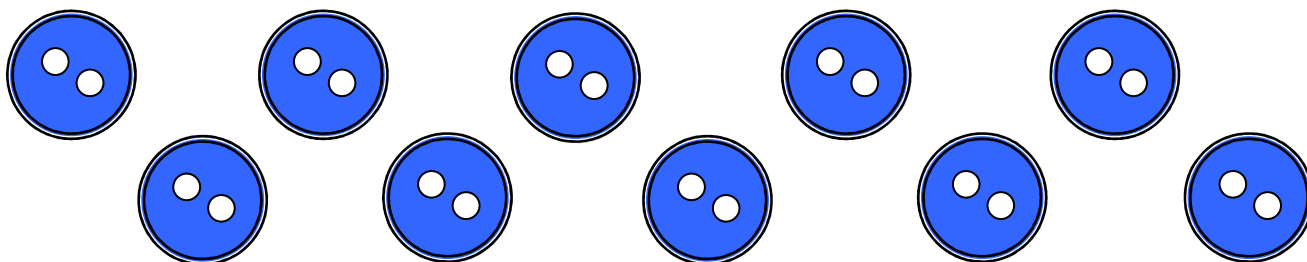


### How many ways?



**You have three boxes. You have 10 buttons.**



**How many ways can you put the buttons in the boxes?**



**I have done one for you:**

<b>Box A</b>	<b>Box B</b>	<b>Box C</b>
<b>8</b>	<b>1</b>	<b>1</b>