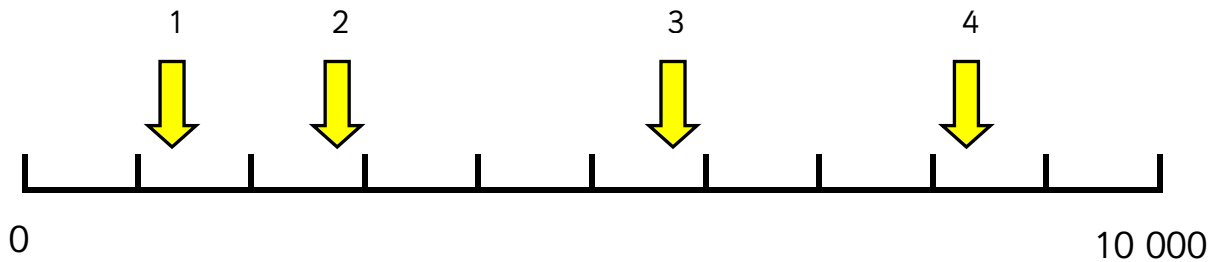


Practice: estimating on a 0 – 10 000 number line

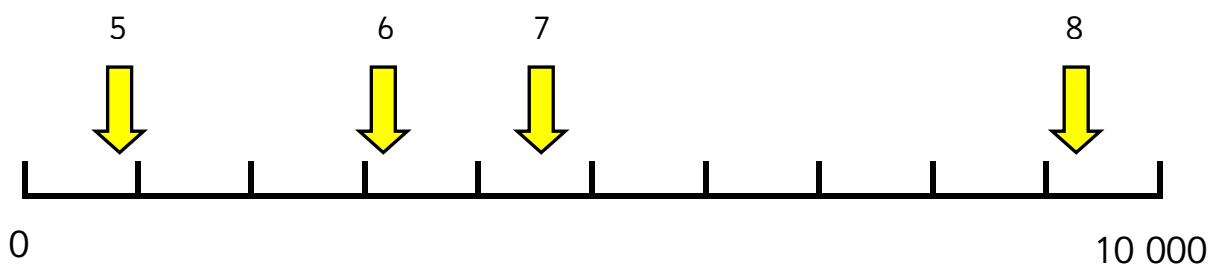
Maths worksheets from mathsblog.co.uk



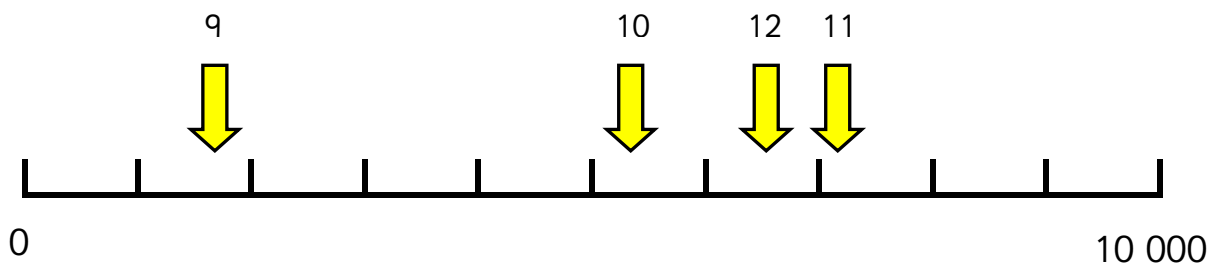
Estimate where you think these numbers are on the 0 to 10 000 number lines.



1. _____ 2. _____ 3. _____ 4. _____



5. _____ 6. _____ 7. _____ 8. _____



9. _____ 10. _____ 11. _____ 12. _____

Practice: estimating on a 0 – 10 000 number line

Maths worksheets from mathsblog.co.uk

Answers

Note all answers are approximate and at least 50 either side can be considered a good estimate

Page 1

- | | | | |
|----------|-----------|-----------|-----------|
| 1. 1 300 | 2. 2 750 | 3. 5 700 | 4. 8 300 |
| 5. 800 | 6. 3 200 | 7. 4 600 | 8. 9 300 |
| 9. 1 700 | 10. 5 350 | 11. 6 550 | 12. 7 200 |