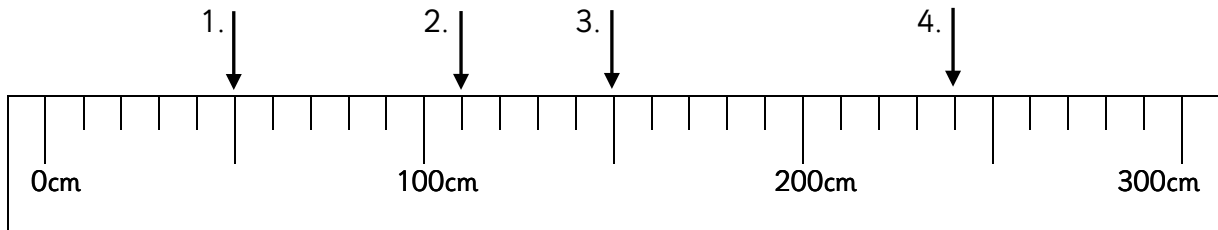


Reading scales (cm)

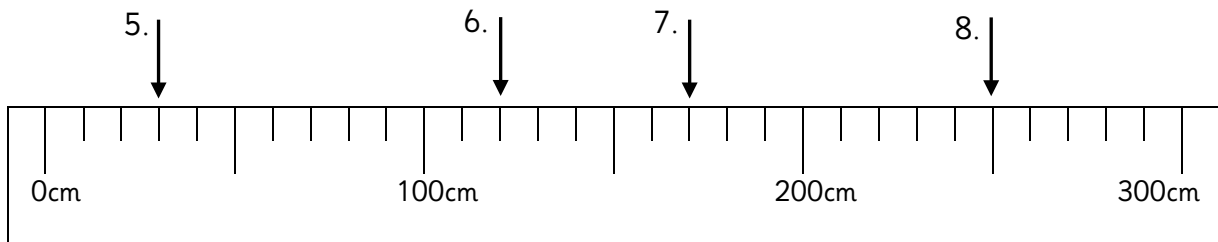
Maths worksheets from mathsblog.co.uk



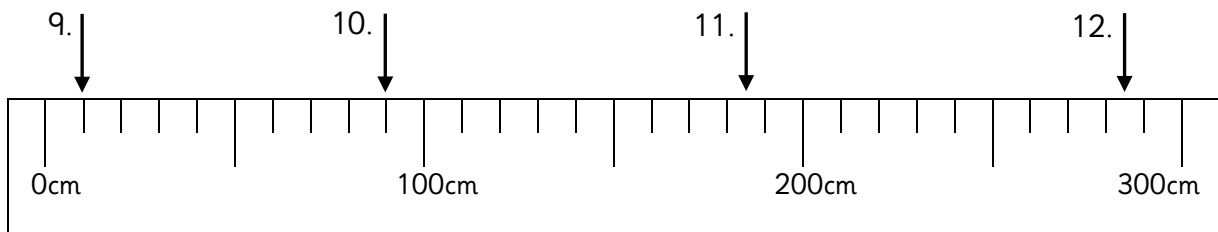
Work out the scale used on this ruler and then work out what lengths are showing on each of the arrows.



1. _____ 2. _____ 3. _____ 4. _____



5. _____ 6. _____ 7. _____ 8. _____



9. _____ 10. _____ 11. _____ 12. _____

Reading scales (cm)
Maths worksheets from mathsblog.co.uk

Answers

- | | | | | |
|------------|------------|-----------|-----------|-----------|
| 1. 50 cm | 2. 110 cm | 3. 150 cm | 4. 240 cm | 5. 30 cm |
| 6. 120 cm | 7. 170 cm | 8. 250 cm | 9. 10 cm | 10. 90 cm |
| 11. 185 cm | 12. 285 cm | | | |