


Valentine Day: Subtraction
Maths worksheets from mathsblog.co.uk



I love subtraction and here are some of my favourites. Can you find the missing numbers?

1. $\heartsuit 47 - \heartsuit 10 = \heartsuit$

2. $\heartsuit 60 - \heartsuit 30 = \heartsuit$

3. $\heartsuit 30 - \heartsuit 19 = \heartsuit$


4. $\heartsuit 52 - \heartsuit 21 = \heartsuit$

5. $\heartsuit 70 - \heartsuit = \heartsuit 20$


6. $\heartsuit 50 - \heartsuit = \heartsuit 10$

7. $\heartsuit 35 - \heartsuit = \heartsuit 10$


8. $\heartsuit 42 - \heartsuit = \heartsuit 12$


9.  Sam bought a Valentine card for his girlfriend for £2.50.
How much change did he get from £5.00 ?



10.  Rachel was given a box of chocolates with 30 chocolates in.
She ate 14 chocolates and felt rather ill! How many were left?



11.  Tom bought two bunches of flowers. They cost £3.50 each.
How much change did Tom get from £10.00 ?



Answers

Page 1

1. 37 2. 30 3. 11 4. 31 5. 50 6. 40 7. 25 8. 30
9. £2.50 10. 16 11. £3