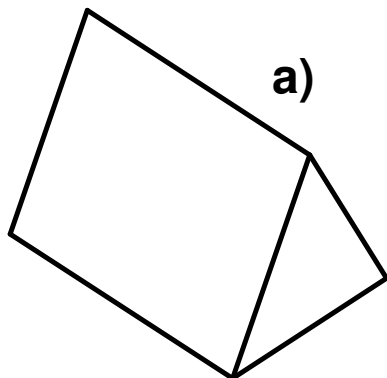
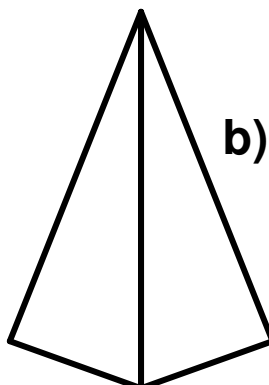


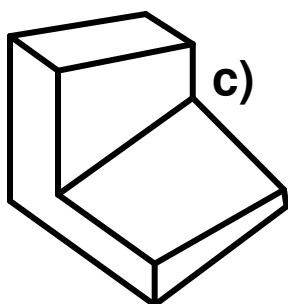
Which of these shapes are prisms?



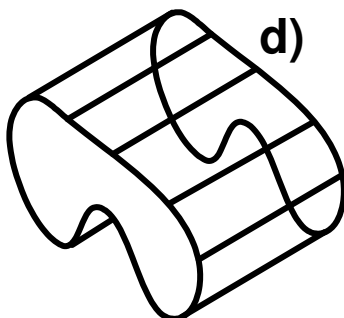
a)



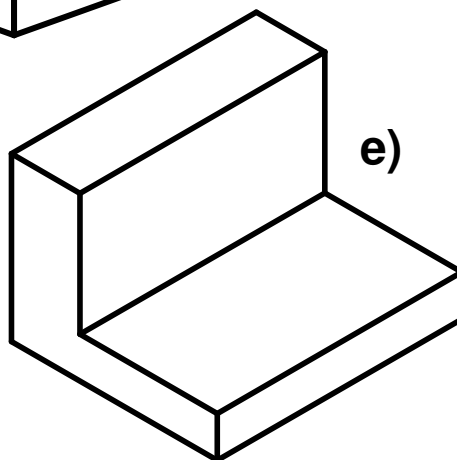
b)



c)



d)



e)

In this box write the names of some prisms you have found.

3501-02 Recognise prisms (pg 2) Answers

Free resources from Mathsblog in association with www.mathsgogogo.co.uk © Mathsgogogo

a) d) and e) are prisms.