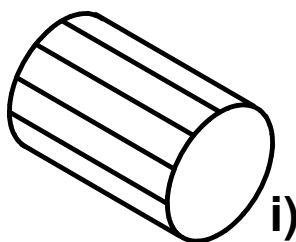
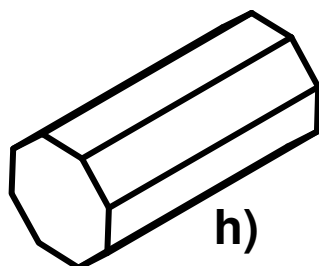
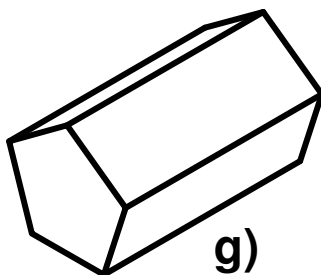
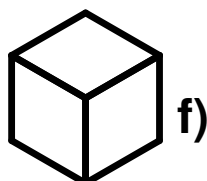
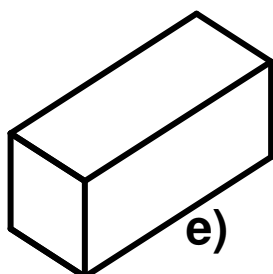
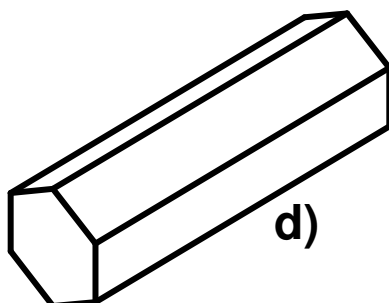
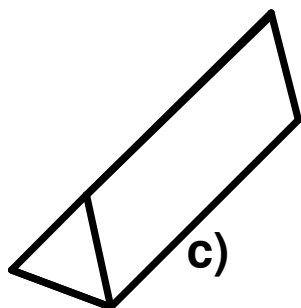
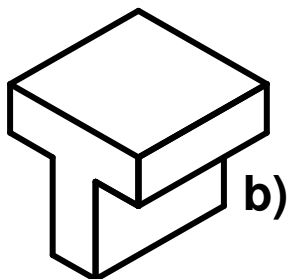
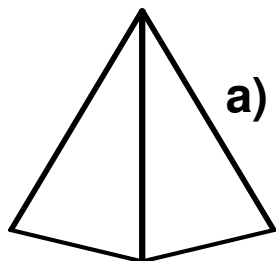


3501-03 Recognise the names of 3-D shapes

Free resources from Mathsblog in association with www.mathsgogogo.co.uk © Mathsgogogo

Join each shape to its name.



Cube

Triangular Prism

Cuboid

Hexagonal Prism

Cylinder

Pentagonal Prism

'T' Shaped Prism

Octagonal Prism

Pyramid

3501-03 Recognise the names of 3-D shapes) Answers

Free resources from Mathsblog in association with www.mathsgogogo.co.uk © Mathsgogogo

- a) pyramid
- b) 'T' shaped prism
- c) triangular prism
- d) hexagonal prism
- e) cuboid
- f) cube
- g) pentagonal prism
- h) octagonal prism
- i) cylinder