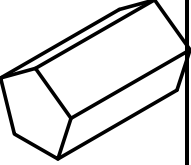
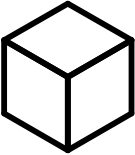
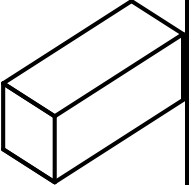
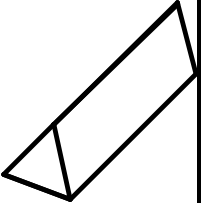
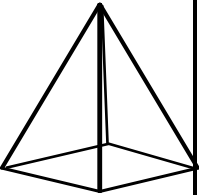
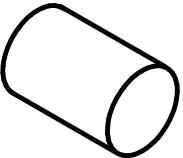








### 3501-04 Properties of 3-D shapes

Free resources from Mathsblog in association with [www.mathsgogogo.co.uk](http://www.mathsgogogo.co.uk) © Mathsgogogo

Fill in the table for the shapes below. One has been done for you.

Shape	Prism?	Number of Faces	Number of Edges	Number of Vertices
	Yes	7	15	10
				
				
				
				
				

**3501-04 Properties of 3-D shapes      Answers**Free resources from Mathsblog in association with [www.mathsgogogo.co.uk](http://www.mathsgogogo.co.uk)    © Mathsgogogo

Shape	Prism?	Number of Faces	Number of Edges	Number of Vertices
	<b>Yes</b>	<b>7</b>	<b>15</b>	<b>10</b>
	Yes	6	12	8
	Yes	6	12	8
	Yes	5	9	6
	No	5	8	5
	Yes	3	2	0