
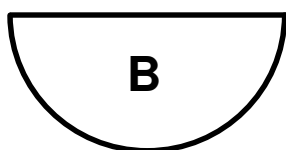


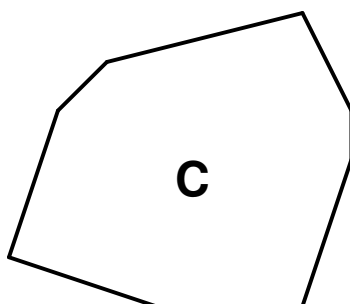
Can you identify each of these 2-D shapes? Join the shape to the name.



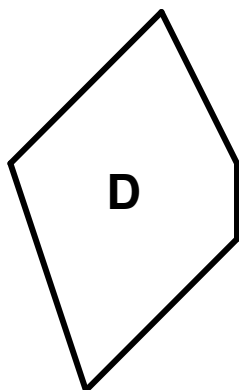
Semicircle




Equilateral Triangle



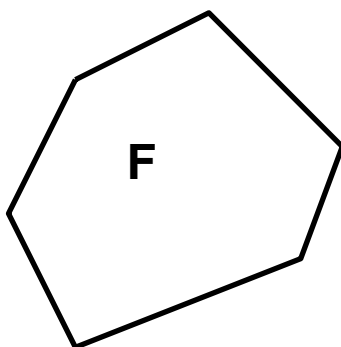
Isosceles Triangle



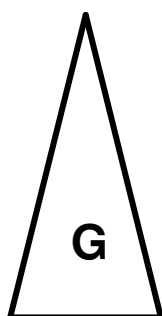
Rectangle



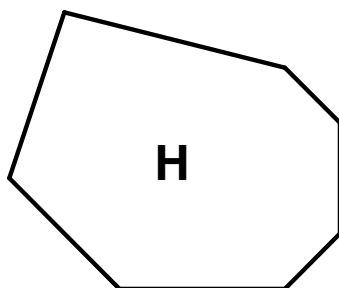
Pentagon



Hexagon



Heptagon



Octagon

4501-03 Revise identifying 2-D shapes (pg 1) Answers

Free resources from Mathsblog in association with www.mathsgogogo.co.uk © Mathsgogogo

- A)** Rectangle
- B)** Semicircle
- C)** Octagon
- D)** Pentagon
- E)** Equilateral Triangle
- F)** Hexagon
- G)** Isosceles Triangle
- H)** Heptagon