

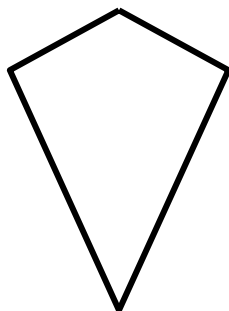



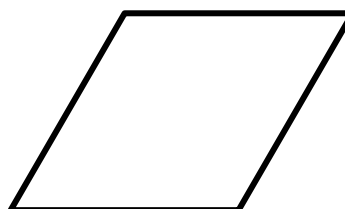
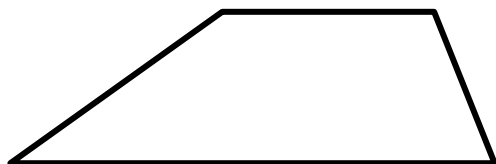
6501-03 More quadrilaterals

Free resources from Mathsblog in association with www.mathsgogogo.co.uk © Mathsgogogo



Here are some amazing quadrilaterals.
Astounding, great shapes!!!!





Write the names of the shapes under each one and then answer these questions.

Which shapes have the following properties. Give the correct names of the shapes:

- a) Four straight sides.
- b) Diagonals cross at right angles.
- c) Diagonals bisect each other (cut each other in half).
- d) Two or more parallel sides.
- e) Diagonals of equal length.
- f) Adjacent sides are equal.
- g) Four right angles.

6501-03 More quadrilaterals Answers

Free resources from Mathsblog in association with www.mathsgogogo.co.uk © Mathsgogogo

- a)** All the shapes
- b)** Kite, rhombus, square
- c)** Kite, rectangle, parallelogram, rhombus, square
- d)** Rectangle, parallelogram, trapezium, rhombus, square
- e)** Rectangle, square
- f)** Kite, rhombus, square
- g)** Rectangle, square