

Comparing and measuring lines

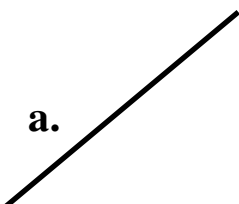



You need a ruler with centimetres on it for this page.

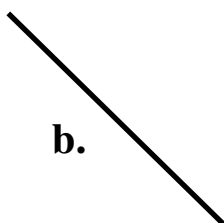
**Measure the lines in centimetres.
Write down which line is longest of each set.**

1. a. _____ b. _____



is longer.

2. a.  b.  c. _____

is longest.

3. a. _____ b.  c. _____

is longest.

4. a.  b.  c. _____

is longest.

2601-03 Comparing and measuring lines (pg 1)

Answers

Free resources from Mathsblog in association with www.mathsgogogo.co.uk © Mathsgogogo

1. b 2. a 3. b 4. c