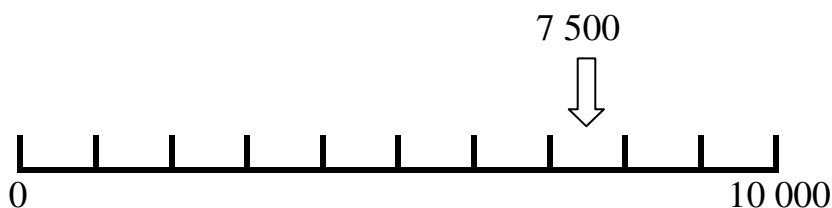


With these questions be prepared to say how you got your answers.

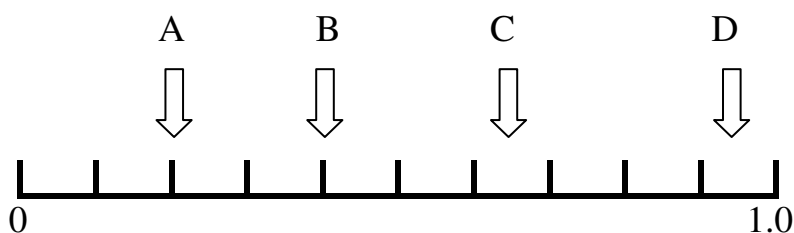
1. This line shows the numbers up to 10 000 divided into thousands.

Draw an arrow to show the following numbers (the first has been done for you).

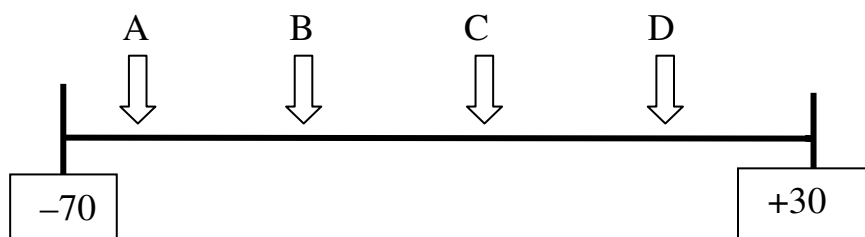
6 000, 1 500, 2 800, 7 000, 5 600



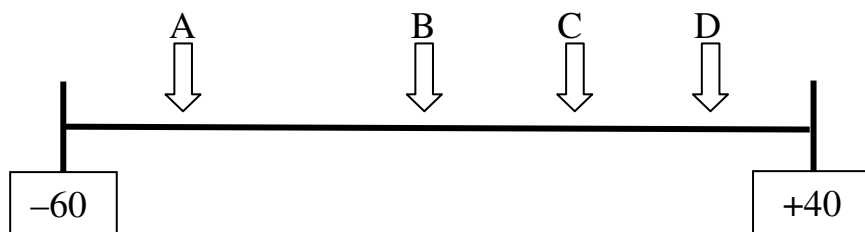
2. Where are the arrows pointing on this line?



3. Where are the arrows pointing on this line?



4. Where are the arrows pointing on this line?



6202-02 Estimating on a number line (pg 2) Answers

Free resources from Mathsblog in association with www.mathsgogogo.co.uk © Mathsgogogo

- | | | | |
|----------|-------|--------|--------|
| 2. A 0.2 | B 0.4 | C 0.65 | D 0.94 |
| 3. A -60 | B -38 | C -14 | D 10 |
| 4. A -43 | B -12 | C 8 | D 27 |