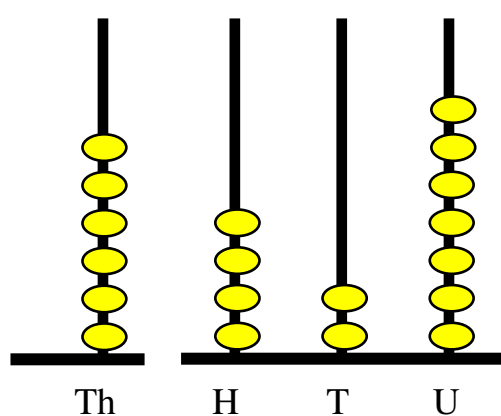


**This abacus shows 3 thousands, 5 hundreds, 5 tens and 6 units.**

**The number is written 3 556**

**In words: three thousand, five hundred and fifty six.**

**Write down what the abacus shows for this:**

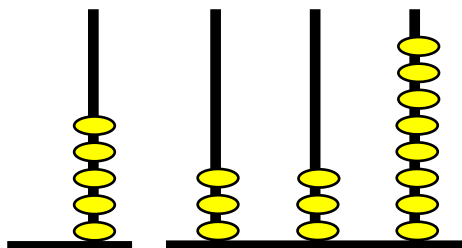
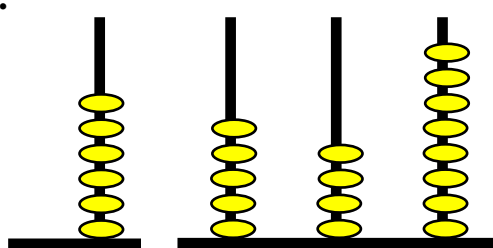
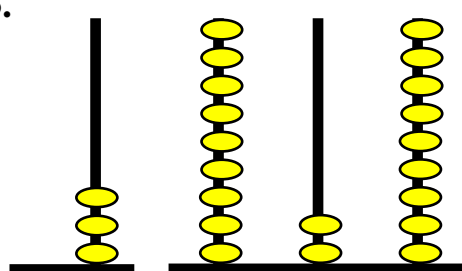
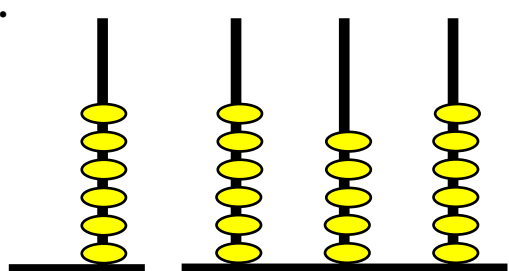

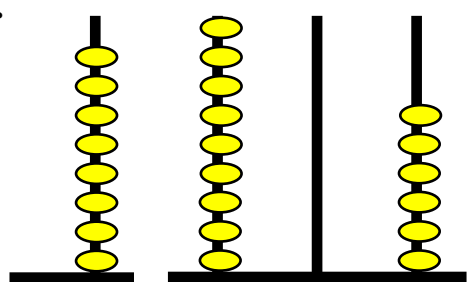
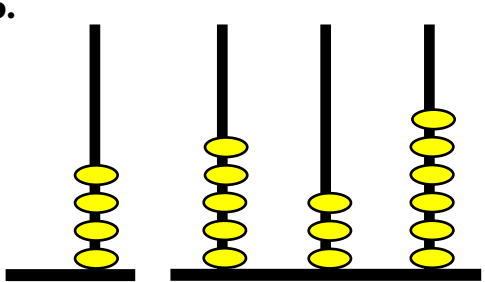
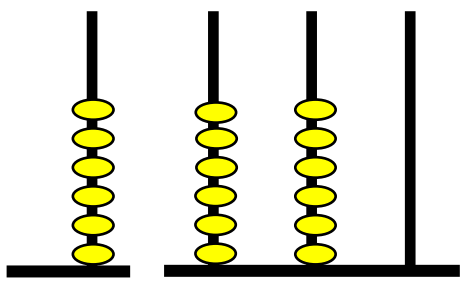
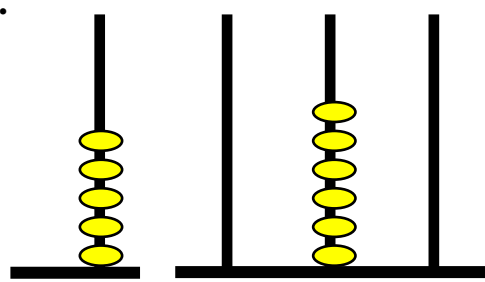


Let's see - it looks like 7 units.



What numbers do these show?

Write the answers IN FIGURES and then IN WORDS.

<p>1.</p>  <p>Th H T U</p>	<p>2.</p>  <p>Th H T U</p>
<p>3.</p> 	<p>4.</p> 
 <div data-bbox="718 1064 1236 1254" style="border: 1px solid black; border-radius: 15px; padding: 10px; display: inline-block;"> <p>I'm getting the hang of this now - quite easy really!</p> </div>	
<p>5.</p> 	<p>6.</p> 
<p>7.</p> 	<p>8.</p> 

**4201-05 Partition into ThHTU (pg 3) Answers**

Free resources from Mathsblog in association with [www.mathsgogogo.co.uk](http://www.mathsgogogo.co.uk) © Mathsgogogo

**1a.** six thousand, four hundred and twenty seven

1. 5 338 five thousand, three hundred and thirty eight
2. 6 548 six thousand, five hundred and forty eight
3. 3 929 three thousand nine hundred and twenty nine
4. 6 656 six thousand, six hundred and fifty six
5. 8 906 eight thousand, nine hundred and six
6. 4 536 four thousand, five hundred and thirty six
7. 6 660 six thousand, six hundred and sixty
8. 5 060 five thousand and sixty