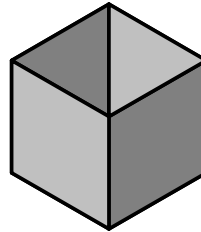
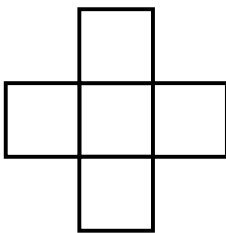


1.

Can you see which of these nets will make an open cube like the one in the picture?



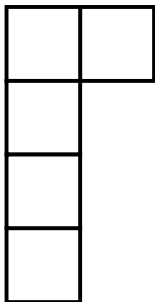
a.




b.



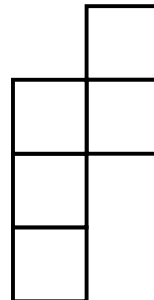
c.



d.



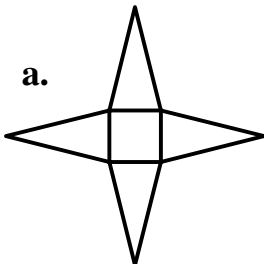
e.



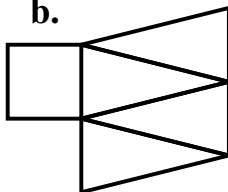
Can you find some more of your own that will make an open cube?

2. Which of these nets will **not** make a square based pyramid?

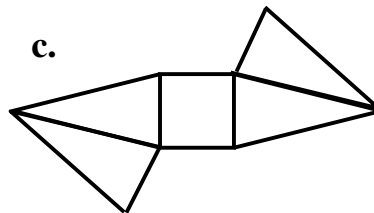
a.



b.



c.



5502-01 Making shapes and patterns with increasing accuracy Answers
Free resources from Mathsblog in association with www.mathsgogogo.co.uk © Mathsgogogo

1. Nets **a.**, **c** and **e** will make an open cube.
2. **b.** will not make a square based pyramid.