
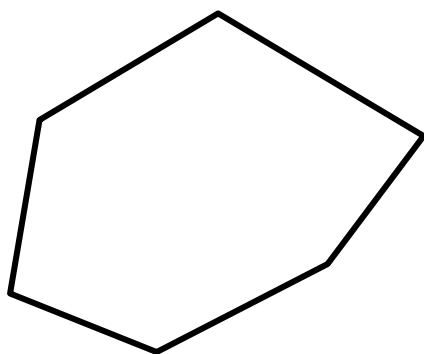


# 4501-05 Concave and convex 2-D shapes

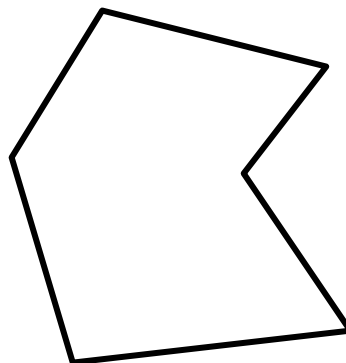
Free resources from Mathsblog in association with [www.mathsgogogo.co.uk](http://www.mathsgogogo.co.uk) © Mathsgogogo



Look at these two shapes. Shape A is a **convex** shape and Shape B is a **concave** shape, but they both have six sides so they are both **hexagons**.



Shape A



Shape B

Which of the shapes below are concave pentagons?

