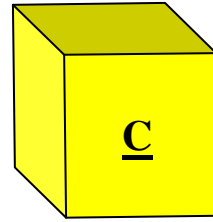
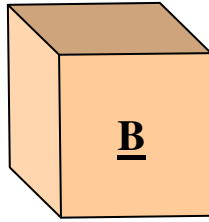
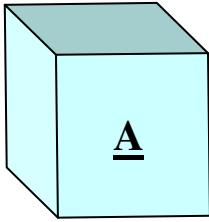



How many ways?



You have three boxes. You have 7 buttons.



How many ways can you put the buttons in the boxes?



I have done one for you:

	Box A	Box B	Box C
	5	1	1