
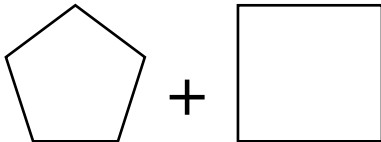


Making 100 by adding

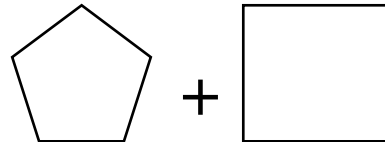
How many sums can you make that give the answer 100 ?

Try and find 10 ways below.

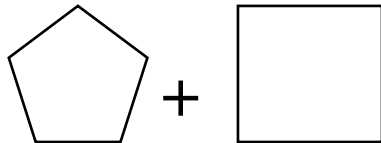
1.



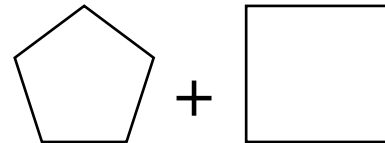
2.



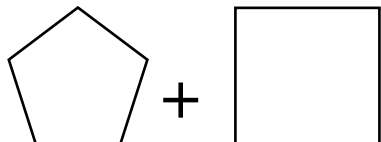
3.



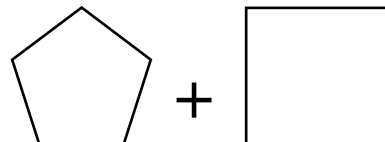
4.



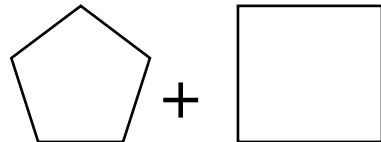
5.



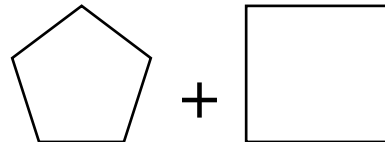
6.



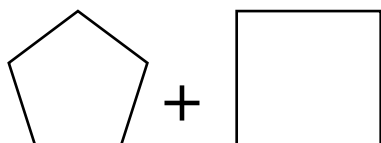
7.



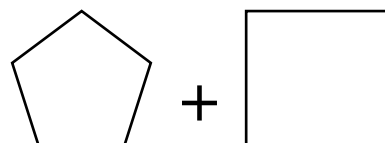
8.



9.



10.



3401-07 Making 100 by adding Answers

Free resources from Mathsblog in association with www.mathsgogogo.co.uk © Mathsgogogo

Various options: 2 numbers making 100