




To the nearest quarter of an hour, what time do these clocks show?




1.



2.




3.



4.



5.



6.

Answers

1. Nine fifteen or a quarter past nine or 9.15
2. Two thirty or half past two or 2.30
3. Six forty five or quarter to seven or 6.45
4. Ten thirty or half past ten or 10.30
5. Five fifteen or quarter past five or 5.15
6. Eleven o'clock or 11.00