

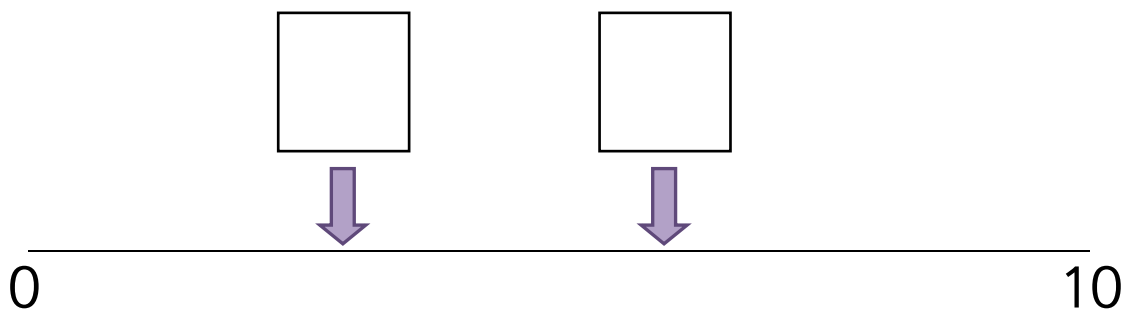
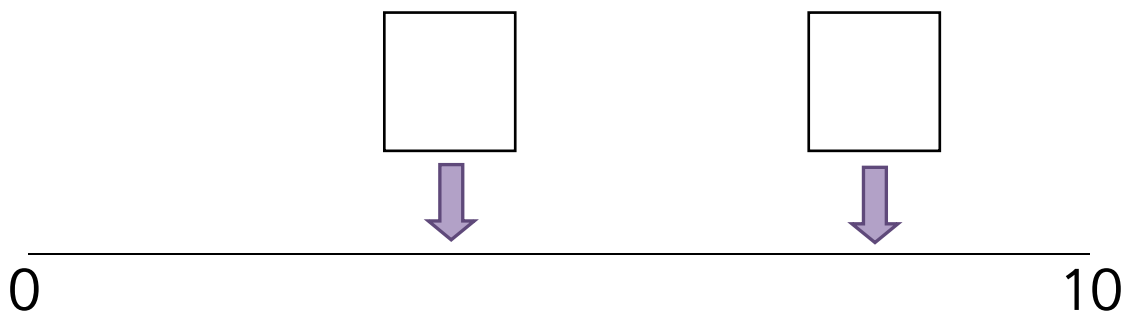
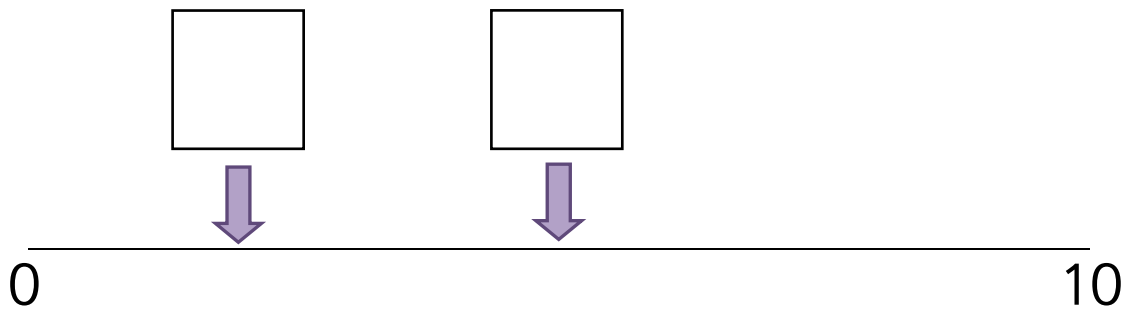
# Estimating numbers on a number line from 0 to 10

Maths worksheets from [mathsblog.co.uk](http://mathsblog.co.uk)



Estimate which whole number each arrow is pointing at on the 0 to 10 number line.

Write your estimates in the boxes.



Estimating numbers on a number line from 0 to 10  
Maths worksheets from [mathsblog.co.uk](http://mathsblog.co.uk)

Answers

1 and 9    2 and 5    4 and 8    3 and 6

Lots more on estimating numbers at [mathsphere.co.uk](http://mathsphere.co.uk)

For early years worksheets and interactive games go to [urbrainy.com](http://urbrainy.com)