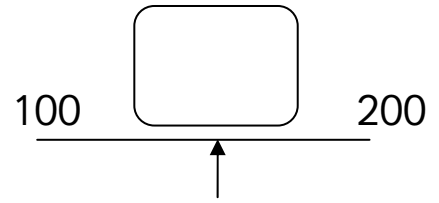
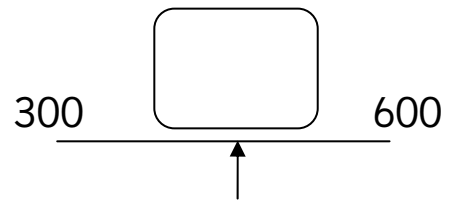


Half way between
Maths worksheets from mathsblog.co.uk


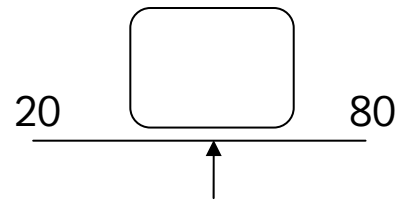
1. What number is half way between 100 and 200?



2. What number is half way between 300 and 400?



3. What number is half way between 20 and 80?



Now try to find these half way numbers.

4. The number which lies half way between 0 and 1.

5. The number which lies half way between 500 and 1000.

6. A The number which lies half way between 9 and 10.

7. The number which lies half way between 4.5 and 6.5.

Answers

1. 150 2. 450 3. 50

4. 0.5 5. 750 6. 9.5 7. 5.5