


Year 2: Read the time to the half or quarter hour

Maths worksheets from mathsblog.co.uk

Join each clock face to the correct written time.



8:15





2:30




3:45

Write the times shown on the clock faces to the nearest half or quarter hour:




Answers


Join each clock face to the correct written time.



8:15



2:30



3:45

A quarter past two or 2:15 or 15 minutes past two

A quarter to six or 15 minutes to 6 or 5:45

Lots more like this on the MathSphere, 'It's All Figured Out' worksheet CD www.mathsphere.co.uk