

Placing negative numbers on a number line (pg 2)

Maths worksheets from mathsblog.co.uk

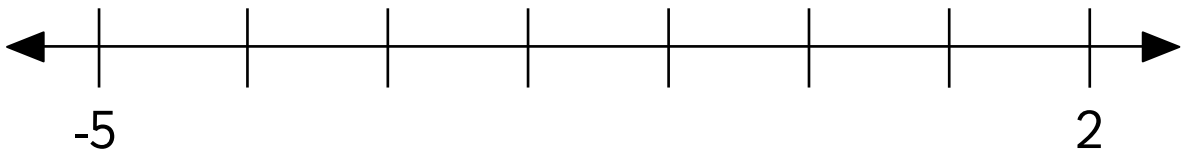


Draw an arrow from the numbers to their correct positions on the number line.

-3

0

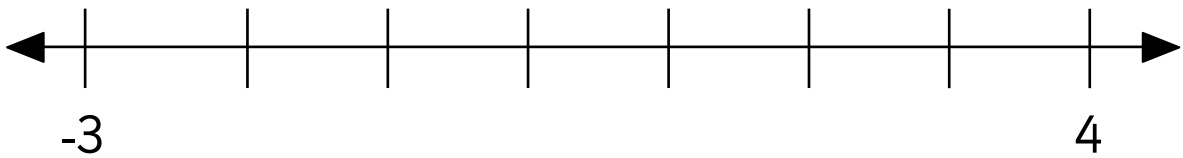
a.



-1

1

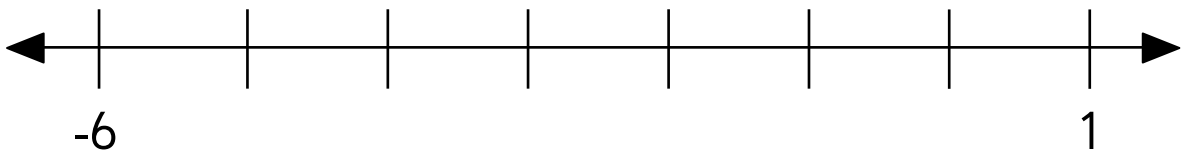
b.



-2

0

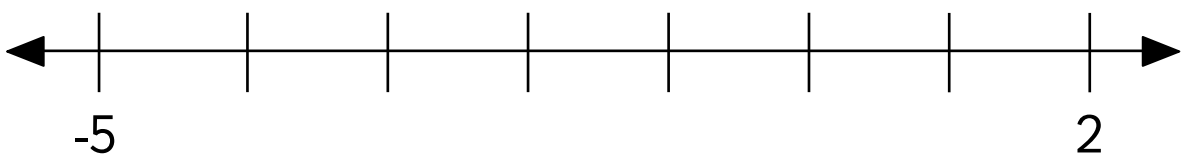
c.



-1

1

d.



Placing negative numbers on a number line (pg 2)

Maths worksheets from mathsblog.co.uk

Answers

