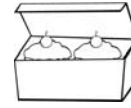
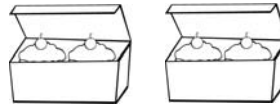



There are 2 cakes in one box.



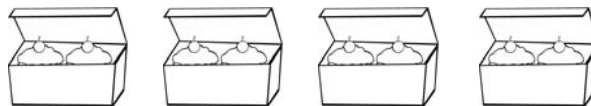
1. How many cakes in 2 boxes?




2. How many cakes in 5 boxes?



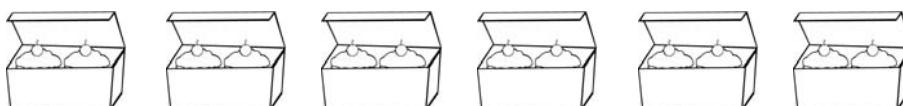
3. How many cakes in 4 boxes?



4. How many cakes in 3 boxes?



5. How many cakes in 6 boxes?



Answers

Page 1

1. 4 2. 10 3. 8 4. 6 5. 12