

Choose two of the numbers and add them together.

Write down the numbers and the answer.

$$\square + \square = \square$$

Choose two different numbers and add them together.

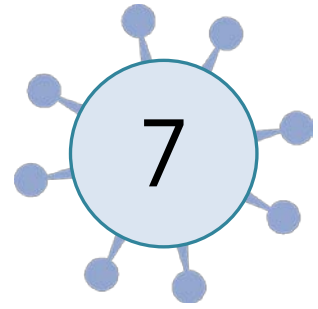
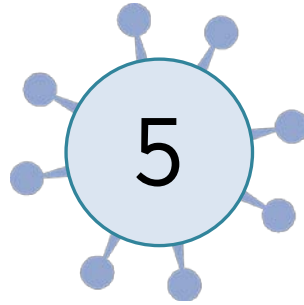
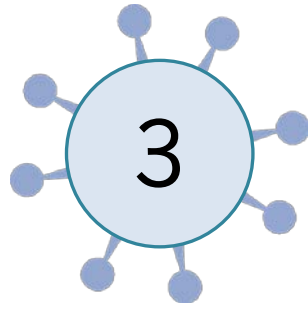
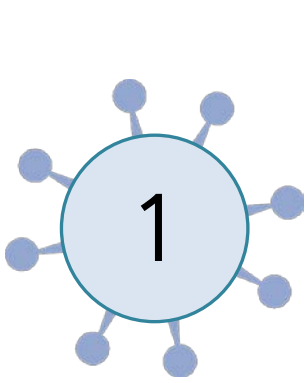
Write down the numbers and the answer.

$$\square + \square = \square$$

Carry on doing this.

$$\begin{array}{ccccc} \square & + & \square & = & \square \\ \square & + & \square & = & \square \\ \square & + & \square & = & \square \\ \square & + & \square & = & \square \end{array}$$

How many different answers can you get?



Choose two of the numbers and subtract them.

Write down the numbers and the answer.

$$\square - \square = \square$$

Choose two different numbers and subtract them.

Write down the numbers and the answer.

$$\square - \square = \square$$

Carry on doing this.

$$\square - \square = \square$$

$$\square - \square = \square$$

$$\square - \square = \square$$

$$\square - \square = \square$$

How many different answers can you get?

## Answers

$$1 + 3 = 5$$

$$1 + 5 = 7$$

$$1 + 7 = 8$$

$$3 + 5 = 8$$

$$3 + 7 = 10$$

$$5 + 7 = 12$$

$$7 - 5 = 2$$

$$7 - 3 = 4$$

$$7 - 1 = 6$$

$$5 - 3 = 2$$

$$5 - 1 = 4$$

$$3 - 1 = 2$$