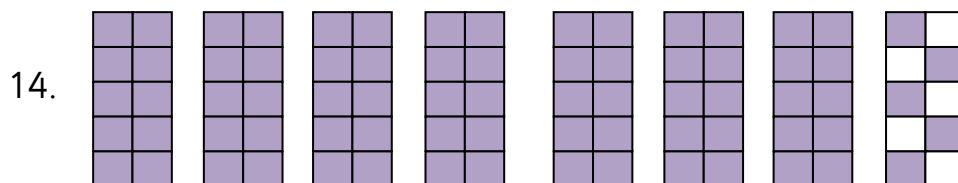
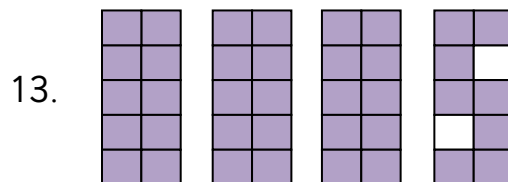
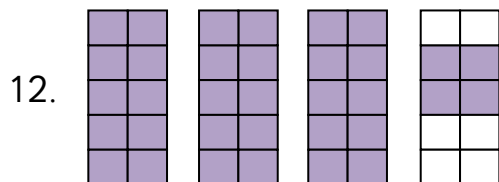
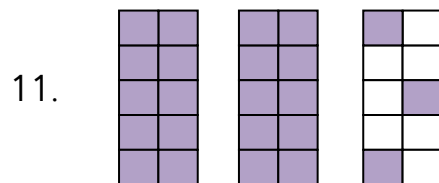
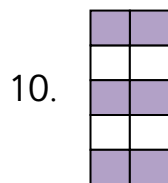
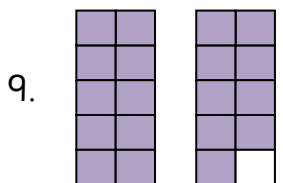
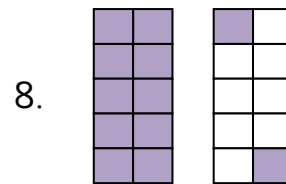
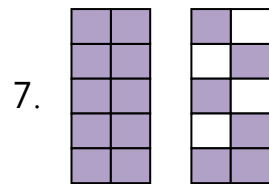
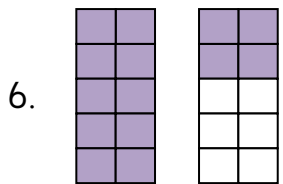
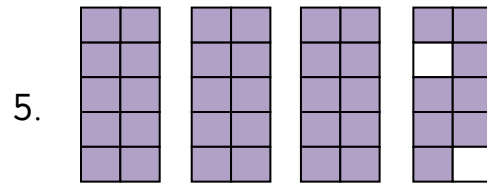
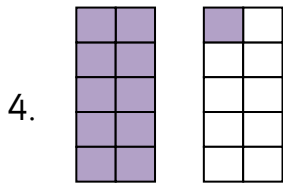
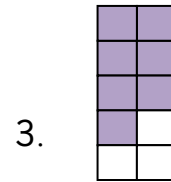
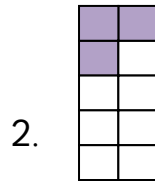
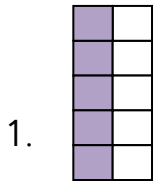


Tenths of rectangles (1)
 Maths worksheets from mathsblog.co.uk



Each whole rectangle is one, and each part of the rectangle is one tenth.
 How much is shown by the shading?



Answers

1. 0.5	2. 0.3	3. 0.7
4. 1.1	5. 3.8	6. 1.4
7. 1.6	8. 1.2	9. 1.9
10. 0.6	11. 2.3	12. 3.4
13. 3.8	14. 7.5	