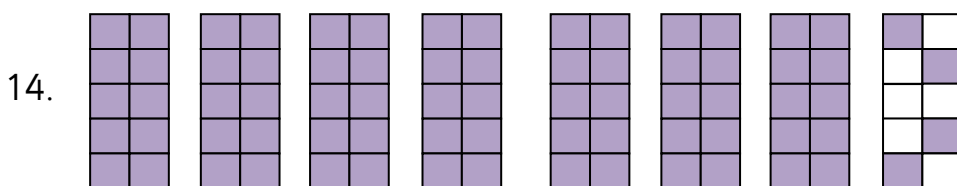
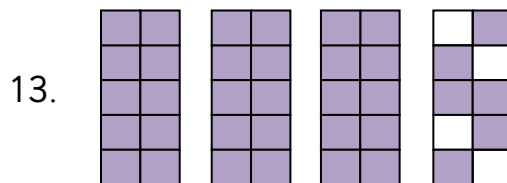
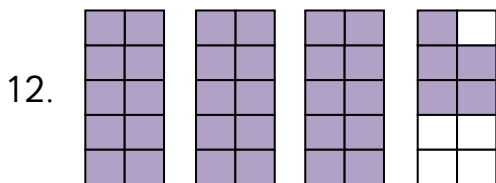
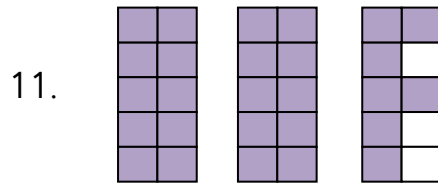
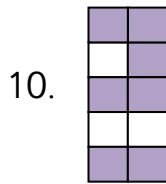
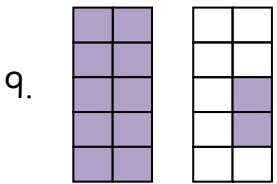
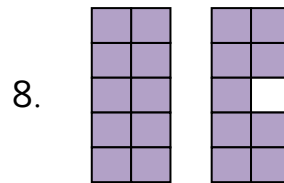
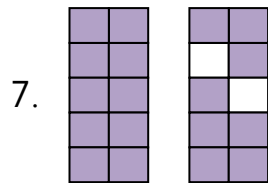
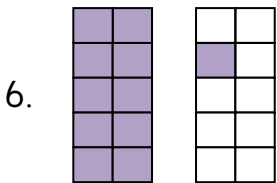
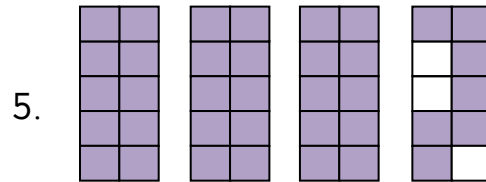
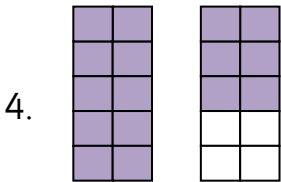
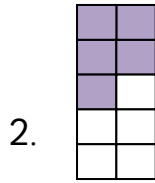
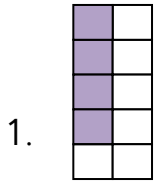


Tenths of rectangles (2)  
 Maths worksheets from [mathsblog.co.uk](http://mathsblog.co.uk)



Each whole rectangle is one, and each part of the rectangle is one tenth.  
 How much is shown by the shading?



## Answers

- |         |         |         |
|---------|---------|---------|
| 1. 0.4  | 2. 0.5  | 3. 0.3  |
| 4. 1.6  | 5. 3.7  | 6. 1.1  |
| 7. 1.8  | 8. 1.9  | 9. 1.2  |
| 10. 0.7 | 11. 2.7 | 12. 3.5 |
| 13. 3.6 | 14. 7.4 |         |