

7

Calculate  $336 - 192$

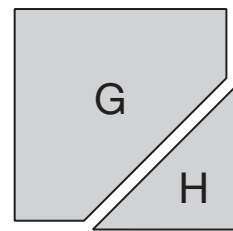
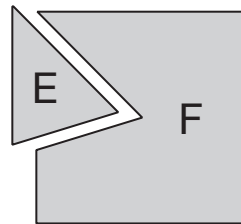
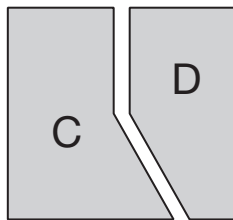
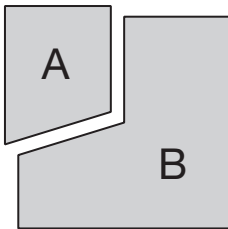


7

1 mark

8

Each of these four squares has been cut into two new shapes.



Write the letters of all the new shapes that are **hexagons**.



8a

1 mark

Write the letters of all the new shapes that are **pentagons**.



8b

1 mark