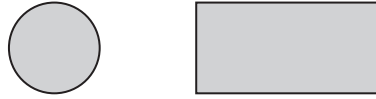


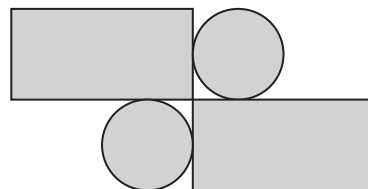
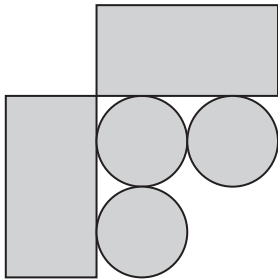
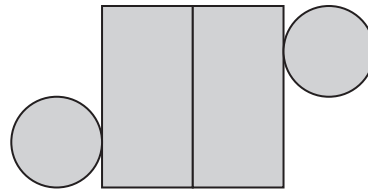
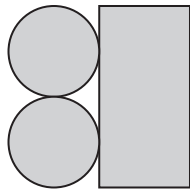
16

Amy has some circular tiles and some rectangular tiles.



She makes these patterns with them.

For each pattern, put a tick (✓) if it has a line of symmetry.  
Put a cross (✗) if it does not.



16i

16ii

2 marks