







FIREWORK SALE: 20% OFF



ROCKETS 
£12.00

COMETS 
£15.00

FOUNTAINS 
£18.00

ROMAN CANDLES 
£10.00



There is 20% off all marked prices for fireworks.
Can you work out what each box will now cost?

1. Rockets

2. Comets

3. Fountains

4. Roman Candles



Make sure you have these correct before trying the next questions.

5. Tim bought 3 boxes of Rockets in the sale. How much did he spend?

6. Ann bought a box of Comets and a box of Fountains in the sale.
How much did she spend?

7. How much did she save by buying in the sale?

8. Sam bought one of each box in the sale.
What change did he get from £50 ?



9. How many boxes of Comets could you buy in the sale for £100 ?

Answers

Page 1

- | | | | | |
|-----------|-----------|-----------|-------|------|
| 1. £9.60 | 2. £12 | 3. £14.40 | 4. £8 | |
| 5. £28.80 | 6. £26.40 | 7. £6.60 | 8. £6 | 5. 8 |