



Understanding subtraction: how many are left?

Maths worksheets from mathsblog.co.uk




6 planes.




3 fly away.

How many are left?

$$6 - 3 = \square$$



8 planes.




4 fly away.

How many are left?


$$8 - 4 = \square$$

Understanding subtraction: how many are left?

Maths worksheets from mathsblog.co.uk




9 planes.



5 fly away.

How many are left?

$$9 - 5 = \square$$



6 planes.



5 fly away.

How many are left?

$$6 - 5 = \square$$