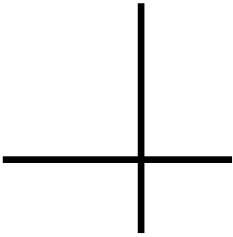


Perpendicular lines
Maths worksheets from mathsblog.co.uk

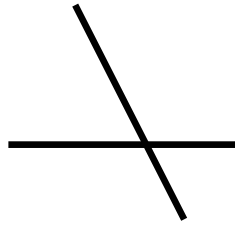


Perpendicular lines are lines which are at right angles to each other. Say whether these lines are perpendicular or not:

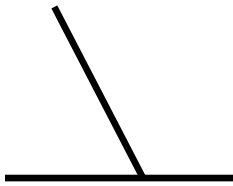
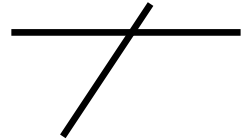
a. yes no



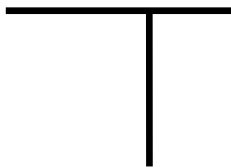
b. yes no




c. yes no



d. yes no



e. yes no




f. yes no


Draw two lines in box A that are perpendicular. Draw two lines in box B that are NOT perpendicular.



Box A



Box B



Answers

Page 1

a. yes b. no c. no d. no e. yes f. yes